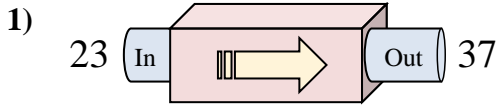
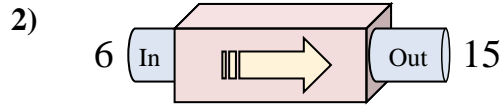




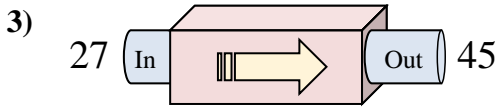
Determine which rule the function machine is using.



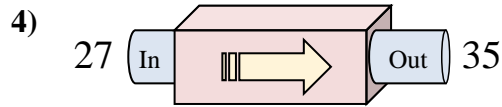
- A. Add 16
- B. Add 9
- C. Add 13
- D. Add 14



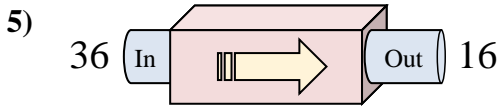
- A. Add 9
- B. Add 6
- C. Subtract 7
- D. Add 5



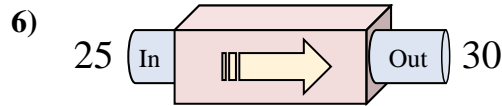
- A. Add 17
- B. Add 15
- C. Subtract 22
- D. Add 18



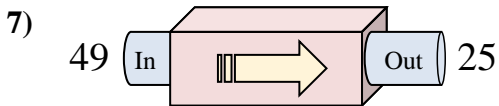
- A. Add 8
- B. Add 12
- C. Subtract 9
- D. Add 3



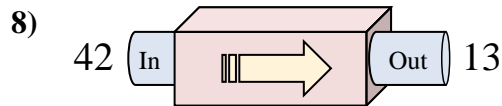
- A. Add 16
- B. Subtract 16
- C. Subtract 20
- D. Subtract 25



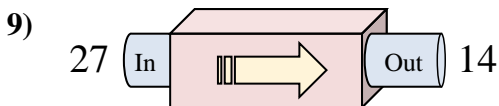
- A. Add 2
- B. Add 4
- C. Add 5
- D. Add 7



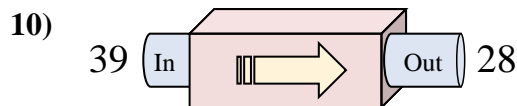
- A. Subtract 24
- B. Subtract 25
- C. Subtract 22
- D. Subtract 19



- A. Subtract 29
- B. Subtract 28
- C. Add 29
- D. Subtract 25



- A. Add 8
- B. Subtract 8
- C. Subtract 13
- D. Subtract 9



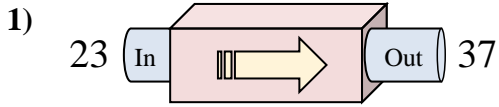
- A. Subtract 15
- B. Add 8
- C. Subtract 11
- D. Subtract 10

Answers

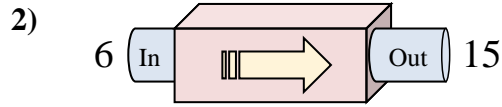
1. _____
2. _____
3. _____
4. _____
5. _____
6. _____
7. _____
8. _____
9. _____
10. _____



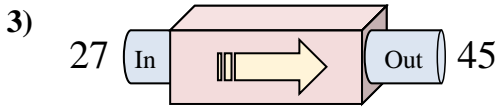
Determine which rule the function machine is using.



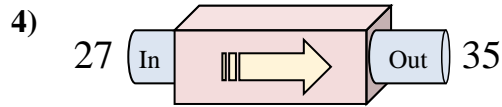
- A. Add 16
- B. Add 9
- C. Add 13
- D. Add 14



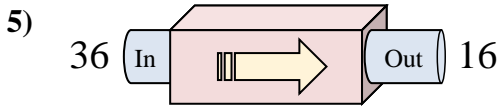
- A. Add 9
- B. Add 6
- C. Subtract 7
- D. Add 5



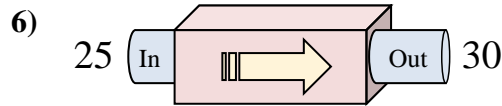
- A. Add 17
- B. Add 15
- C. Subtract 22
- D. Add 18



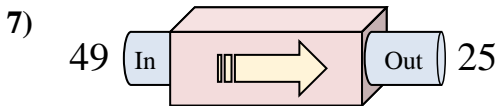
- A. Add 8
- B. Add 12
- C. Subtract 9
- D. Add 3



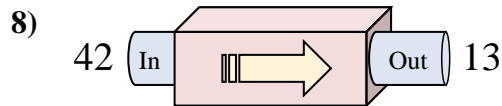
- A. Add 16
- B. Subtract 16
- C. Subtract 20
- D. Subtract 25



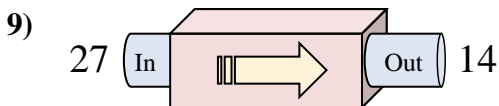
- A. Add 2
- B. Add 4
- C. Add 5
- D. Add 7



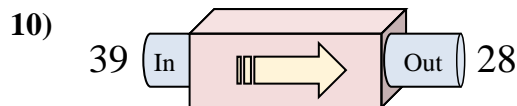
- A. Subtract 24
- B. Subtract 25
- C. Subtract 22
- D. Subtract 19



- A. Subtract 29
- B. Subtract 28
- C. Add 29
- D. Subtract 25



- A. Add 8
- B. Subtract 8
- C. Subtract 13
- D. Subtract 9



- A. Subtract 15
- B. Add 8
- C. Subtract 11
- D. Subtract 10

Answers

- 1. **D**
- 2. **A**
- 3. **D**
- 4. **A**
- 5. **C**
- 6. **C**
- 7. **A**
- 8. **A**
- 9. **C**
- 10. **C**